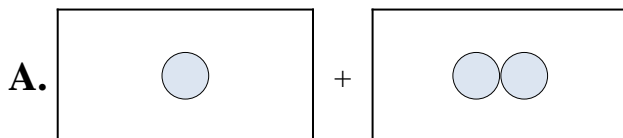


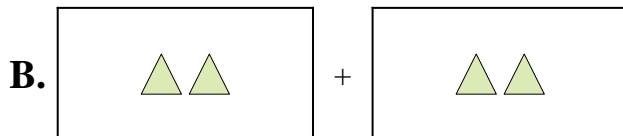


Match each addition equation to its visual equivalent.

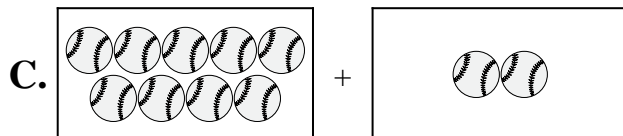
1) $9 + 2$



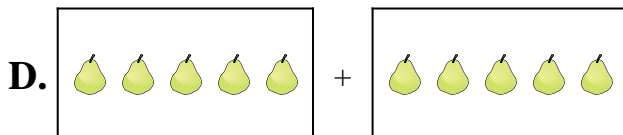
2) $2 + 6$



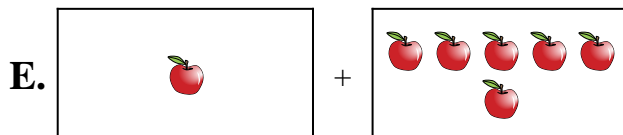
3) $1 + 2$



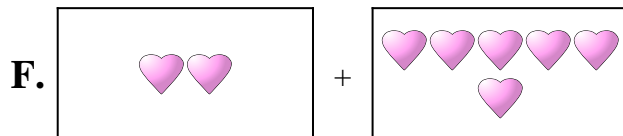
4) $1 + 6$



5) $3 + 4$




6) $10 + 10$



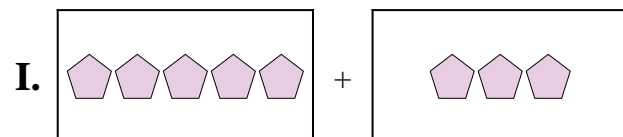
7) $5 + 3$



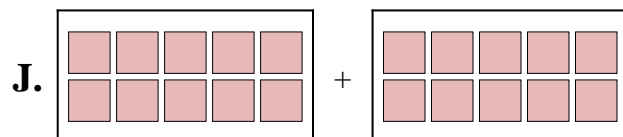
8) $7 + 10$



9) $2 + 2$



10) $5 + 5$



Answers

1. _____

2. _____

3. _____

4. _____

5. _____

6. _____

7. _____

8. _____

9. _____

10. _____