

Name _____

Time to the Quarter Hour

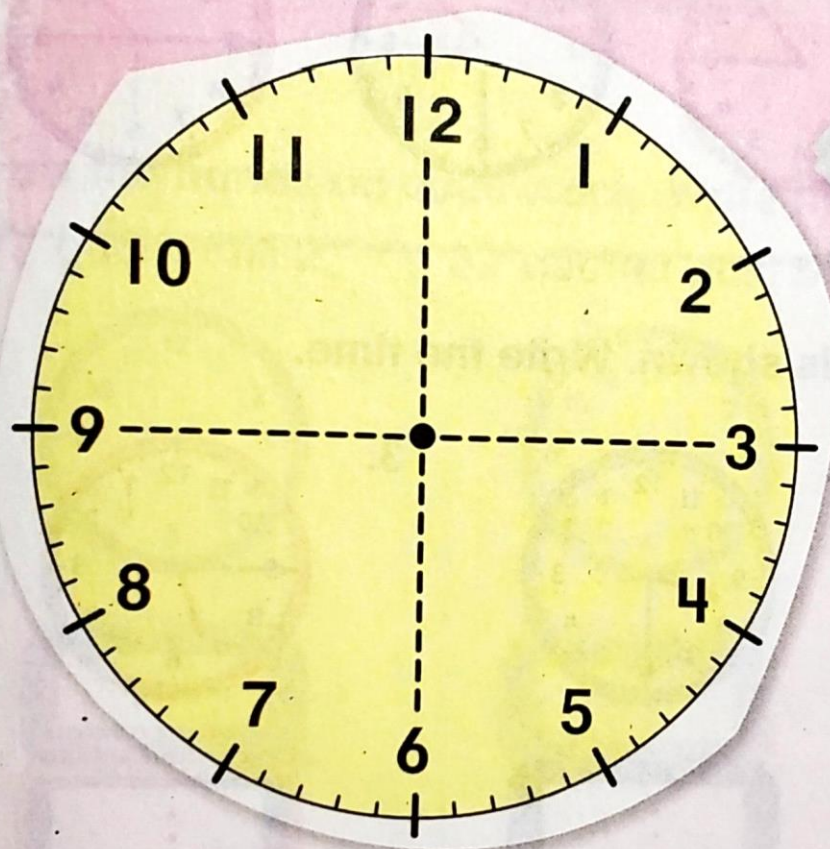
Lesson 4

ESSENTIAL QUESTION

How do I use and tell time?



Explore and Explain



quarter past _____



Teacher Directions: Have students fold a paper plate, or circular piece of paper in half. Fold it again in quarters. Unfold and look at the fold marks. On the clock above, place cubes on the quarter hours referring back to their plate or circle. Draw hands on the clock to show quarter past an hour. Write the time.

See and Show

You can show time to the **quarter hour**. There are 15 minutes in a quarter hour. There are 4 quarter hours in an hour.

1 o'clock




quarter past 1



half past 1



quarter till 2



Use . Tell what time is shown. Write the time.

1.



2.



3.




Talk Math

At 4:15, where is the minute hand? Explain.

Name _____

On My Own

Use . Tell what time is shown. Write the time.


4.



5.



6.



Draw the hands on each clock. Write the time.

7. quarter till 2



8. quarter past 5




9. quarter past 12



Read the time. Write the time on the digital clock.

10. twelve forty-five



11. four fifteen



12. nine thirty

