


Nome: \_\_\_\_\_ data: \_\_\_\_\_


Calcule




@Atividades-Suzano



$$\begin{array}{r} 59 \\ + 10 \\ \hline \end{array}$$


$$\begin{array}{r} 86 \\ + 12 \\ \hline \end{array}$$


$$\begin{array}{r} 24 \\ + 61 \\ \hline \end{array}$$

$$\begin{array}{r} 35 \\ + 33 \\ \hline \end{array}$$


$$\begin{array}{r} 67 \\ + 01 \\ \hline \end{array}$$


$$\begin{array}{r} 45 \\ + 41 \\ \hline \end{array}$$


$$\begin{array}{r} 97 \\ + 02 \\ \hline \end{array}$$