



Name: \_\_\_\_\_

Date: \_\_\_\_\_

# Subtraction to 10




Use the pictures to help you solve each problem. Cross out the amount to take away, then count how many are left.



$$4 - 3 = \underline{\quad}$$




$$3 - 1 = \underline{\quad}$$




$$6 - 2 = \underline{\quad}$$



$$5 - 3 = \underline{\quad}$$



$$7 - 1 = \underline{\quad}$$




$$8 - 2 = \underline{\quad}$$



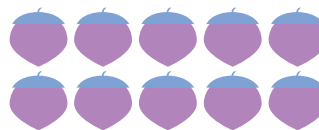
$$2 - 1 = \underline{\quad}$$



$$3 - 3 = \underline{\quad}$$



$$6 - 3 = \underline{\quad}$$



$$10 - 2 = \underline{\quad}$$