

Name: _____

Date _____

How many are there: Worksheet 1

Topic: Count the number of objects in each group and write number on the line.






















Name: _____

Date _____

How many are there: Worksheet 2

Topic: Count the number of objects in each group and write number on the line.






















Name: _____

Date _____

How many are there: Worksheet 3

Topic: Count the number of objects in each group and write number on the line.






















Name: _____

Date _____

How many are there: Worksheet 4

Topic: Count the number of objects in each group and write number on the line.






















Name: _____

Date _____

How many are there: Worksheet 5

Topic: Count the number of objects in each group and write number on the line.











