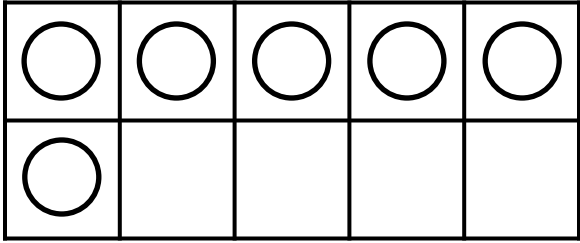


Name _____


Ten Frame LET'S MAKE



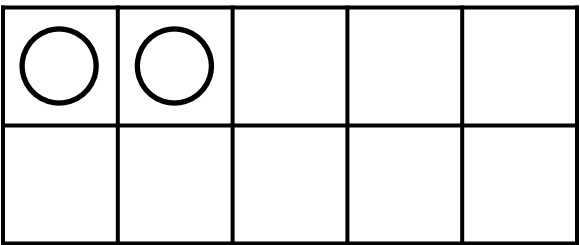
Draw more to make 10.
Finish the number sentence.



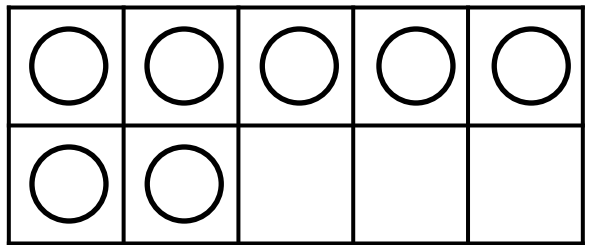
$$\underline{6} + \underline{\quad} = \underline{10}$$



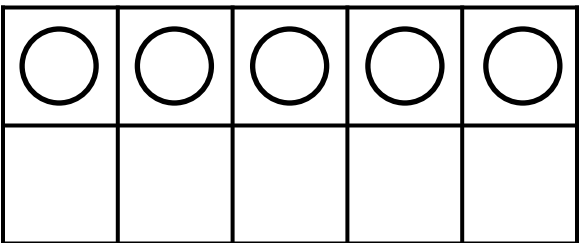
$$\underline{1} + \underline{\quad} = \underline{10}$$



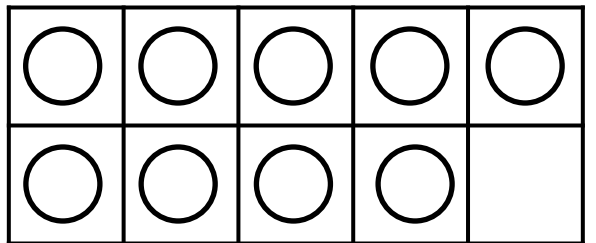
$$\underline{2} + \underline{\quad} = \underline{10}$$



$$\underline{7} + \underline{\quad} = \underline{10}$$



$$\underline{5} + \underline{\quad} = \underline{10}$$



$$\underline{9} + \underline{\quad} = \underline{10}$$