


# Subtraction



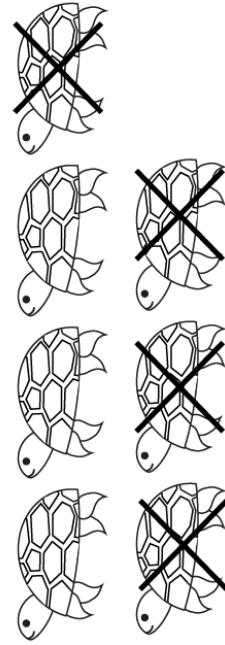
$$6 - 3 = \square$$




$$5 - 2 = \square$$




$$9 - 2 = \square$$



$$7 - 4 = \square$$



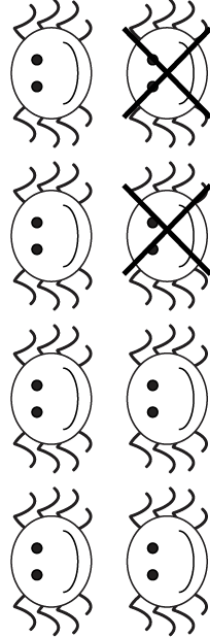
$$8 - 4 = \square$$



$$4 - 1 = \square$$



$$7 - 2 = \square$$



$$8 - 2 = \square$$